

Name:

Date:

8  
total marks


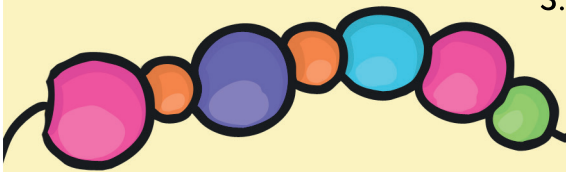
twinkl

## Maths Quiz - 10

1. 40, 50, 60, 70, 80, ,


2. July, August, , October, November

3.




4.


4	five
14	six
5	fourteen
6	four



5.





6.



7.



8.



1 mark

1 mark

1 mark

1 mark

1 mark

1 mark

1 mark

1 mark

Total for  
this page

question	answer	marks	notes
1. Complete the following number sequence: 40, 50, 60, 70, 80, _____, _____			
1	90, 100	1	<b>National Curriculum Objective:</b> Count in multiples of twos, fives and tens (Year 1)
2. Have a look at the months of the year on your sheet. One is missing from this sequence. Which month is missing: September, December or January?			
2	September	1	<b>National Curriculum Objective:</b> Recognise and use language relating to dates, including days of the week, weeks, months and years (Year 1)
3. I would like 20 beads. I have already drawn some. Can you add some more to give me a total of 20?			
3	13 beads added.	1	<b>National Curriculum Objective:</b> Represent and use number bonds and related subtraction facts within 20 (Year 1)
4. Join the numbers to the correct words.			
4	14 - fourteen 5- five 4 - four 6 - six	1	<b>National Curriculum Objective:</b> Read and write numbers from 1 to 20 in numerals and words (Year 1)
5. There are 9 fish in the sea. 9 more come and join them. How many are there altogether now?			
5	18	1	<b>National Curriculum Objective:</b> Solve one-step problems that involve addition and subtraction, using concrete objects and pictorial representations (Year 1)
6. There are 12 apples and 18 pears in the bowl. How many pieces of fruit are in the bowl altogether?			
6	30	1	<b>National Curriculum Objective:</b> Solve one-step problems that involve addition and subtraction, using concrete objects and pictorial representations (Year 1)
7. Write the number one less than 88.			
7	87	1	<b>National Curriculum Objective:</b> Given a number, identify one more and one less (Year 1)
8. Have a look at the clock on your sheet. What time is it on the clock?			
8	12:30 or half past 12	1	<b>National Curriculum Objective:</b> Tell the time to the hour and half past the hour and draw the hands on a clock face to show these times (on analogue and digital clocks) (Year 1)
total		8	